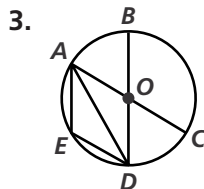
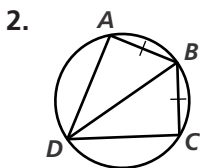
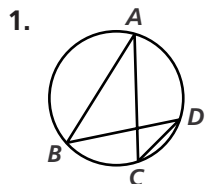


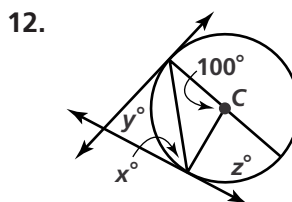
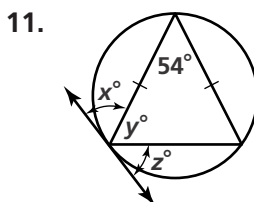
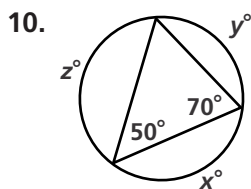
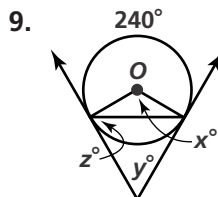
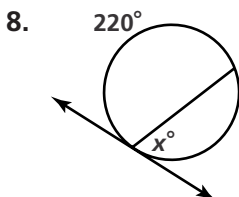
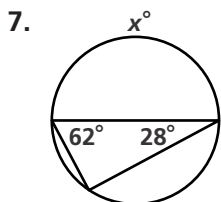
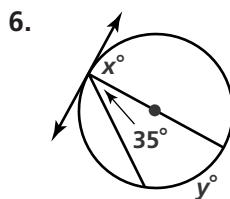
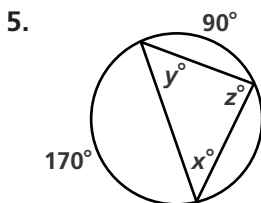
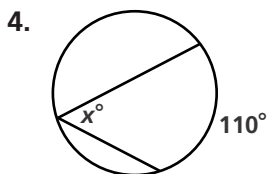
# Practice 11-3

## Inscribed Angles

For each diagram, indicate a pair of congruent inscribed angles.

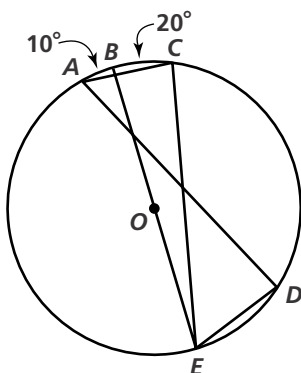


Find the value of each variable.



Find each indicated measure for  $\odot O$ .

13. a.  $m\widehat{AE}$   
b.  $m\angle C$   
c.  $m\angle BEC$   
d.  $m\angle D$



14. a.  $m\angle A$   
b.  $m\angle B$   
c.  $m\angle C$   
d.  $m\angle D$

